



JUNIORS
ACTIVITY PACK 4



Multiples of 5 that make 100 Find the missing numbers that make these sums correct....

1. $15 + \square = 100$

2. $35 \square = 100$

3. $\square + 65 = 100$

4. $\square + 85 = 100$

5. $75 + \square = 100$

6. $5 + \square = 100$

7. $\square + 25 = 100$

8. $\square + 15 = 100$

9. $45 + \square = 100$

10. $85 + \square = 100$

11. $\square + 35 = 100$

12. $\square + 75 = 100$

13. $25 + \square = 100$

14. $95 + \square = 100$

Count by 2s



a.

2

4

10

b.

64

68

72

84

c.

30

42

d.

84

92

f.

26



STAR WARS

Word Search



ALDERAAN
 ANAKIN
 BATTLESHIP
 C3PO
 CHEWBACCA
 DARTH VADER

DEATH STAR
 DROID
 EMPIRE
 FORCE
 HAN SOLO
 JEDI

LEIA
 LUCAS
 LUKE
 OBI-WAN
 PALPATINE
 R2D2

SITH
 SKYWALKER
 STORMTROOPER
 TATOOINE
 WOOKIEE
 YODA

WHICH ONE IS THE ODD MAN OUT?



A



B



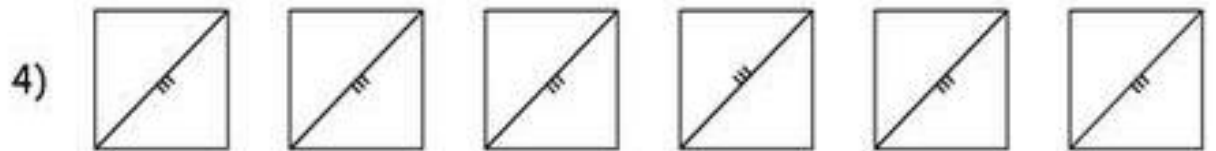
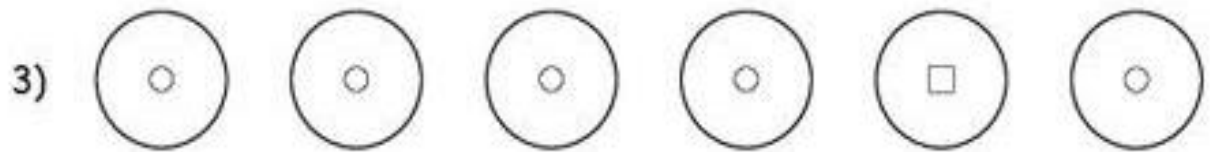
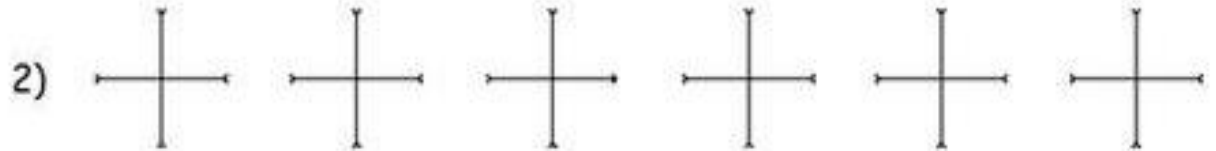
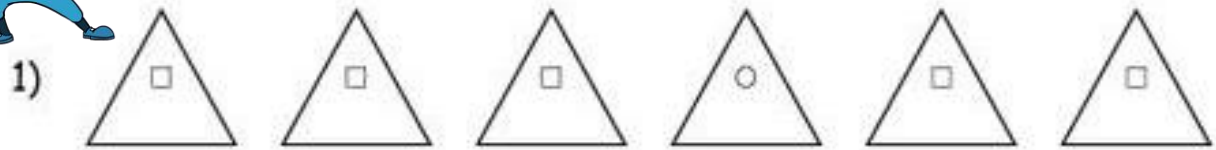
C


FIND THE ODD EMOJI OUT!






Under Line the odd-one-out in each row...





A duck has 2 legs.

How many legs do 2 ducks have?



How many legs do 3 ducks have?




How many legs do 4 ducks have?



How many legs do 5 ducks have?



How many legs do 6 ducks have?



Japan Word Search

S U S H I N H Y

O Y K O T R S E

I A S N O B I N

R F E F A N F Z

bonsai
fan
fish
sushi
Tokyo
Yen

